



## Area and Perimeter Quiz


Give the area and perimeter of each polygon below.



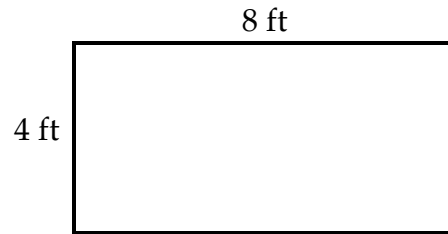
1. ↑ A = \_\_\_\_\_  
P = \_\_\_\_\_



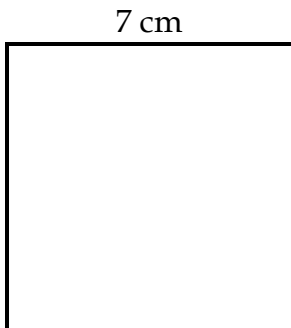
2. ↑ A = \_\_\_\_\_  
P = \_\_\_\_\_



3. ↑ A = \_\_\_\_\_  
P = \_\_\_\_\_

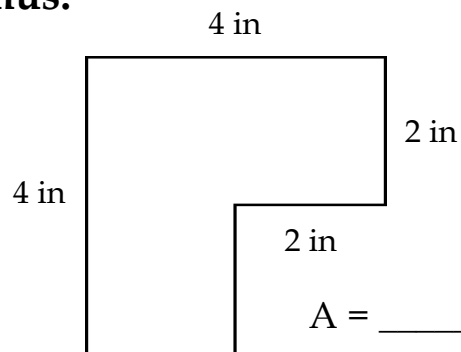


4. ↑ A = \_\_\_\_\_  
P = \_\_\_\_\_



5. ↑ A = \_\_\_\_\_  
P = \_\_\_\_\_

### Bonus:



A = \_\_\_\_\_  
P = \_\_\_\_\_