

Daily Math Puzzlers

Name _____



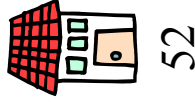
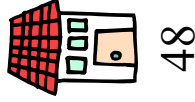
Try to solve each problem by yourself, and then we will work on them together. Be sure to show your work using pictures, words, or numbers.

1. Jacob lost his first tooth on February 7th. He lost another one exactly 2 weeks later. On what day did he lose the 2nd tooth?

Answer: _____


✓- ✓ ✓+

2. The houses on Markam Street were numbered as shown below. If the rest of the houses follow the same pattern, what would be the number on the 7th house?



Answer: _____

✓- ✓ ✓+



Daily Math Puzzlers Continued

3. Jill surveyed her friends to find out what kind of juice they like. She tallied her results. How many more people like orange juice than pineapple juice?

Apple	
Orange	
Pineapple	

Answer: _____
✓- ✓ ✓+

4. Diana needs to sew some lace around a square blanket. If the blanket is 2 metres long on each edge, how many metres of lace does she need to buy?

Answer: _____
✓- ✓ ✓+